

# PinggoPlus



**Forlaget Pingo**

Desiree Nørkjær Jespersen

Navn og klasse

## **PingoPlus 4**

Lavet af Desiree Nørkjær Jespersen  
Illustrationer: Mette Sandlykke og Kathrine Holtum Ingemann  
1. udgave, 2. oplag,  
Trykt i Danmark

© Forlaget Pingo  
2024

ISBN: 978-87-94575-09-6

Denne bog er beskyttet i medfør af gældende dansk lov om ophavsret.  
Kopiering må kun ske i overensstemmelse med loven. Det betyder f.eks. at kopiering til  
undervisningsbrug kun må ske efter aftale med Copydan Tekst og Node.




# Pingomat



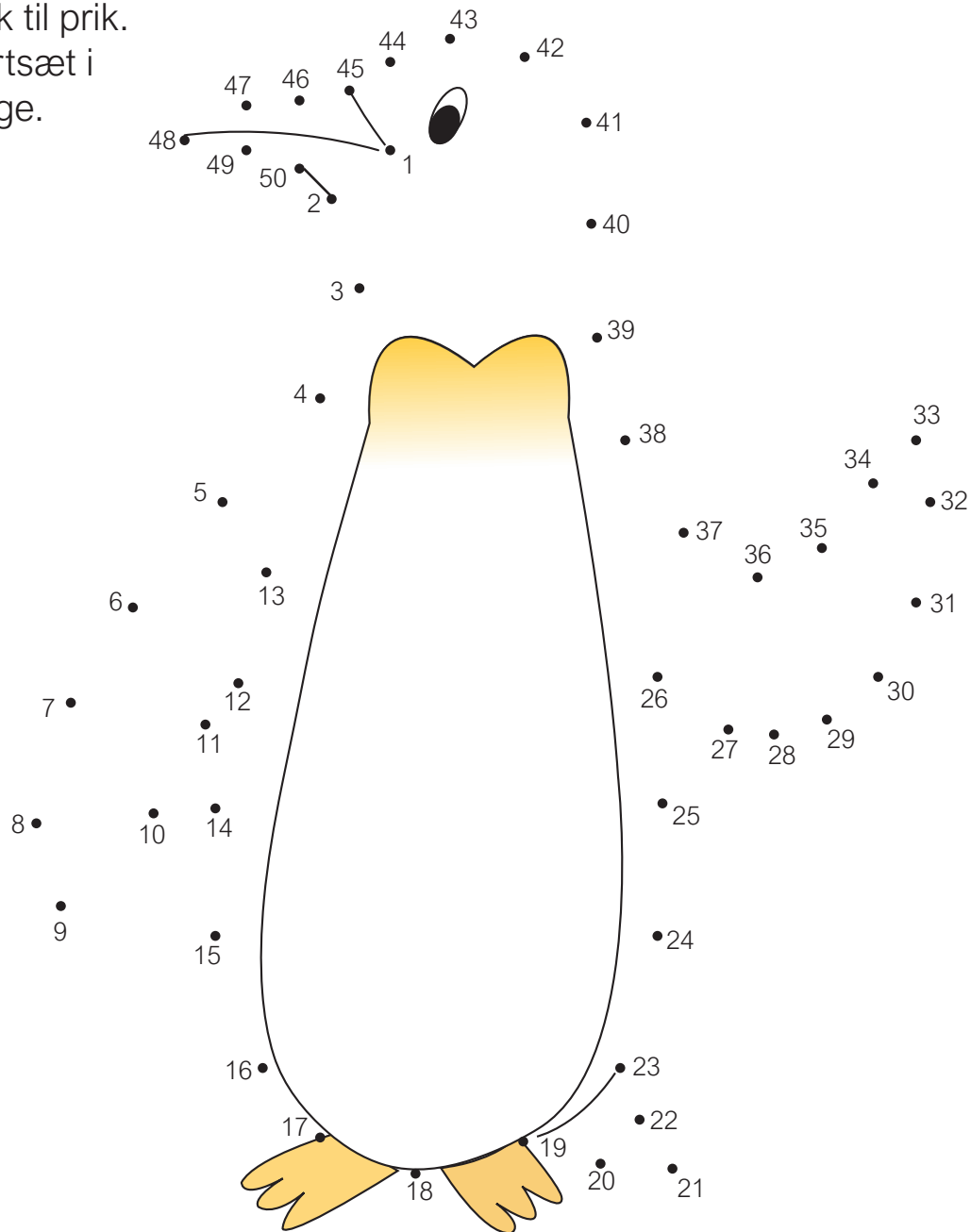
**Forlaget Pingo**  
af Desiree Nørkjær Jespersen



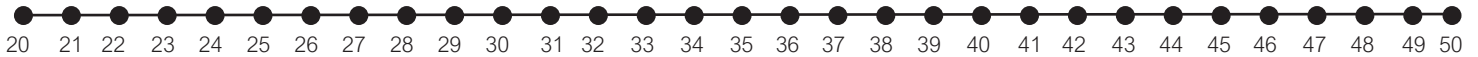
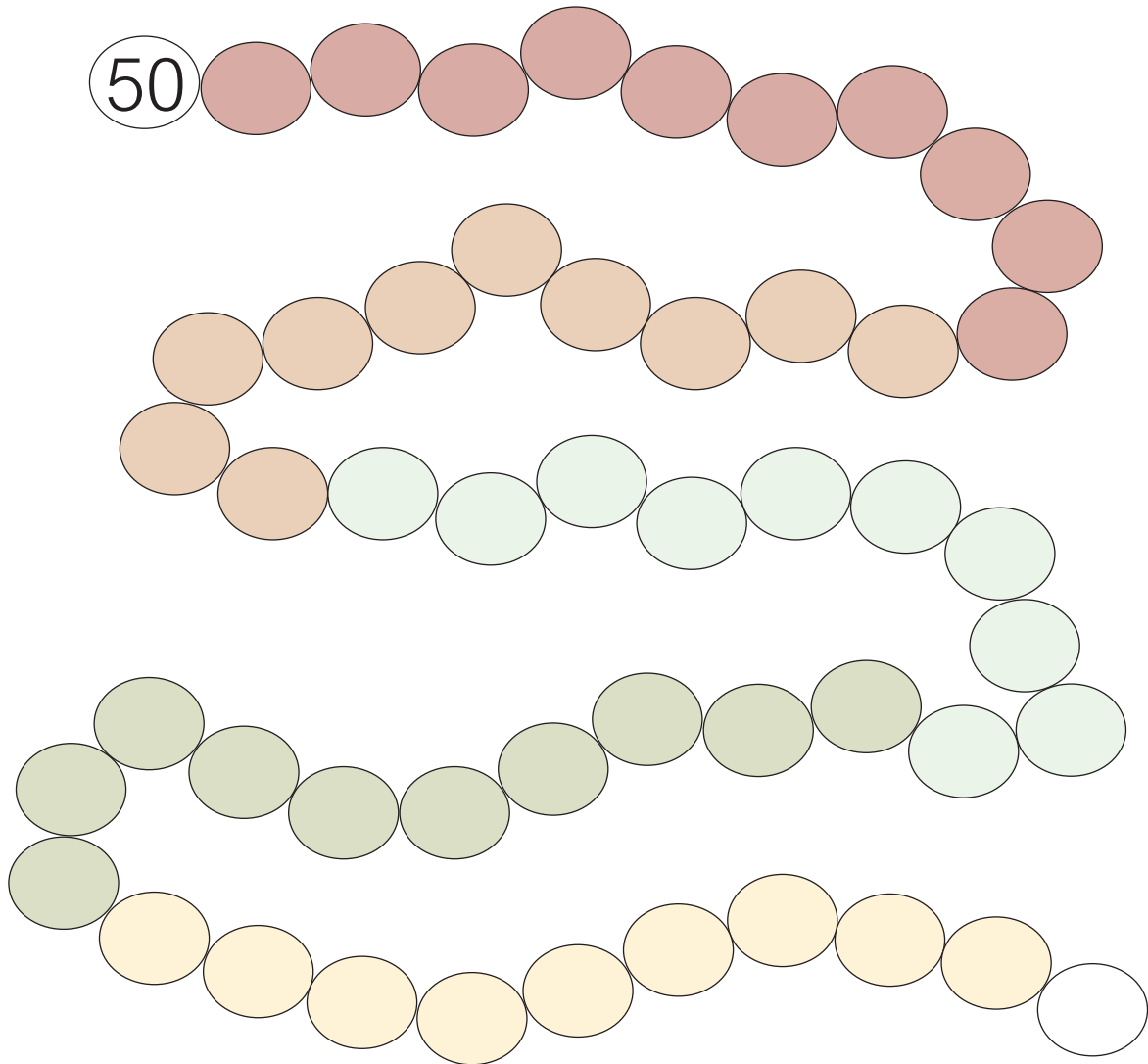
Sæt streg mellem tallene. Start ved 20 og tæl helt frem til 50.



Tegn streg fra prik til prik.  
Start ved 1 og fortsæt i  
tallenes rækkefølge.



Tæl **baglæns** fra 50. Skriv de manglende tal i boblerne.




Skriv de manglende tal. Husk at tælle 2 frem.

0	2	4		
	12	14		
20		24		
	32			
40				



Mål dine ting på det længste stykke. Hvad er længst?



Mål andre ting.

Jeg har målt: \_\_\_\_\_ = \_\_\_\_\_ cm

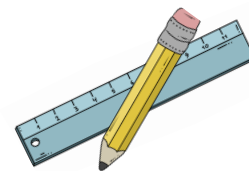
Jeg har målt: \_\_\_\_\_ = \_\_\_\_\_ cm

Jeg har målt: \_\_\_\_\_ = \_\_\_\_\_ cm

Jeg har målt: \_\_\_\_\_ = \_\_\_\_\_ cm



Tegn linjerne færdige.



14 cm

■.....

12 cm

■.....

5 cm

■.....

15 cm

■.....

9 cm

■.....



17 cm

■.....



13 cm

■.....

Regn og farv.



Plus varerne. Hvad skal de betale?



\_\_\_\_\_ kr  
+ \_\_\_\_\_ kr  
= \_\_\_\_\_ kr





\_\_\_\_\_ kr  
+ \_\_\_\_\_ kr  
= \_\_\_\_\_ kr




\_\_\_\_\_ kr  
+ \_\_\_\_\_ kr  
= \_\_\_\_\_ kr



\_\_\_\_\_ kr  
+ \_\_\_\_\_ kr  
= \_\_\_\_\_ kr

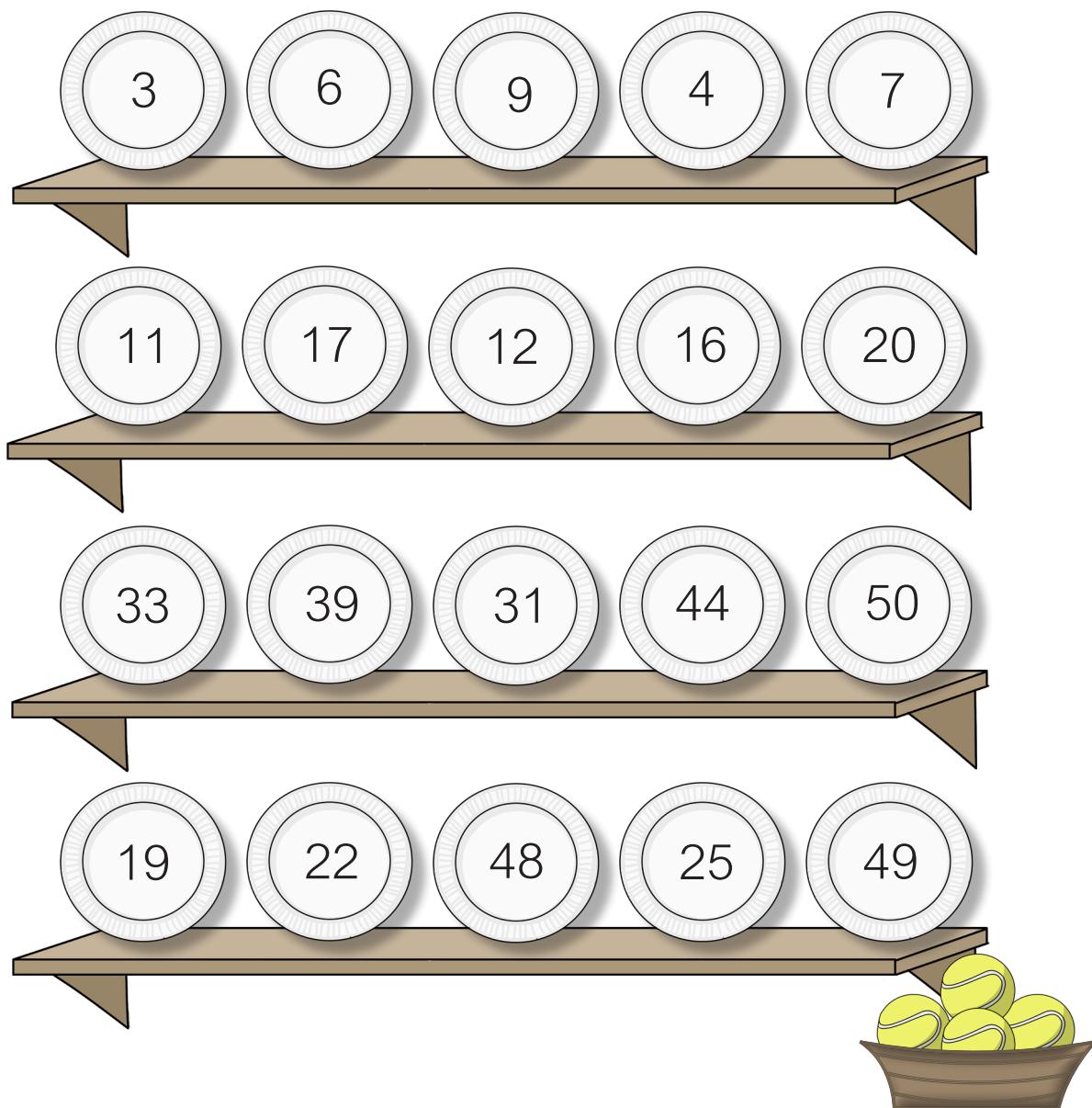


\_\_\_\_\_ kr  
+ \_\_\_\_\_ kr  
= \_\_\_\_\_ kr



\_\_\_\_\_ kr  
+ \_\_\_\_\_ kr  
= \_\_\_\_\_ kr

Ram tallerknerne med **ulige** tal. Sæt kryds over dem.



Hop og skriv tallene.

Hop 2



Hop 4




Hop 5




Hop 10




Hvad skal du betale? Farv mønterne.

  
34 kr


1 1 2 2  
5 5 5  
10 10 10 10

  
27 kr


1 1 2 2  
5 5 5  
10 10 10 10

  
50 kr


1 1 2 2  
5 5 5  
10 10 20 20

  
45 kr


1 1 2 2  
5 5 5  
10 10 20 20

  
36 kr


1 1 2 2  
5 5 5  
10 10 10 10

  
29 kr


1 1 2 2  
5 5 5  
10 10 10 10

  
14 kr

1 1 2 2  
5 5 5  
10 10 20 20

  
48 kr

1 1 2 2  
5 5 5  
10 10 10 10

  
19 kr

1 1 2 2  
5 5 5  
10 10 10 10

Hvilke mønter skal du bruge? Sæt kryds.

23 kr



30 kr



38 kr



28 kr



39 kr



47 kr



50 kr



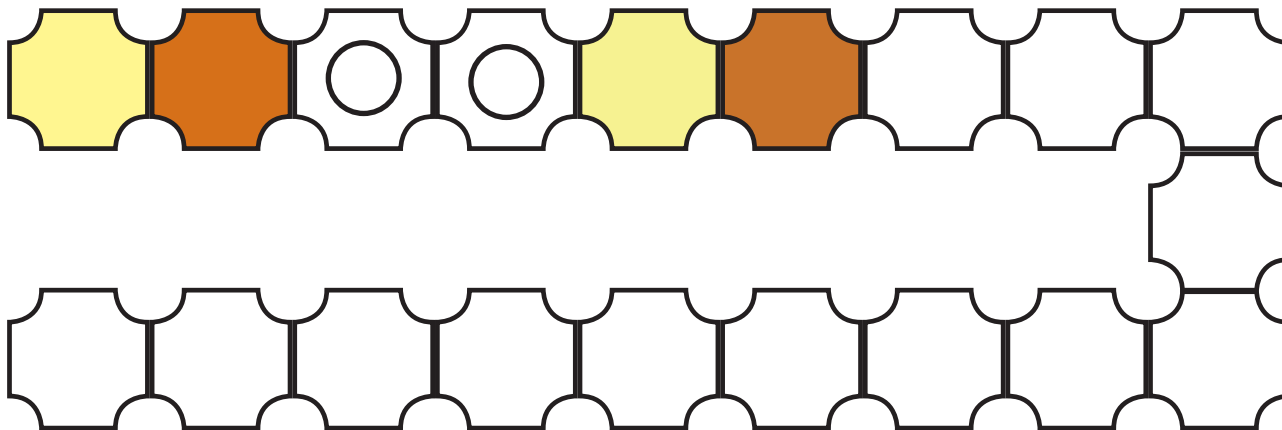
35 kr



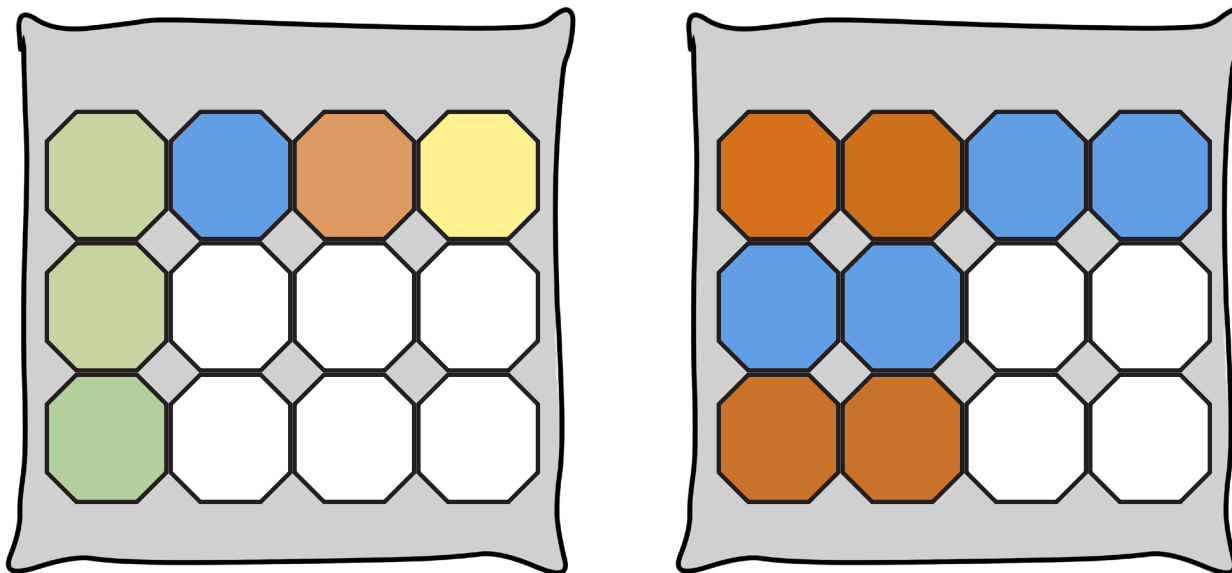
41 kr



Fortsæt mønsteret.


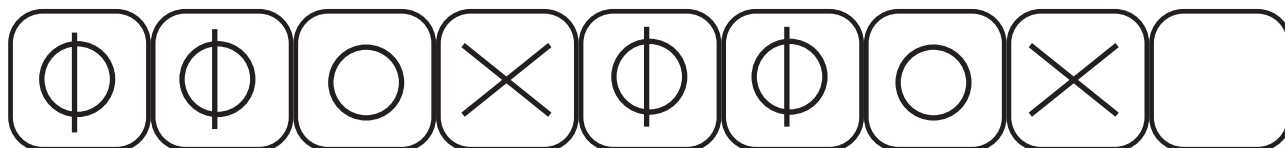


Fortsæt mønsteret.





















Fortsæt mønsteret.




Labyrint. Gå kun på **lige** tal .



2	5	27		11	47	37	32	46	8
4		33					20		14
8	12	20		2	48	50	6		28
		26	45	16					42
13	15	6		44	36	22		36	32
27		30	34			10	13	16	
19			16	40	18	28		4	18
7	5	35	49						10
31			45	33	1	20	34	14	48
25	47	3	15			50			

Farv billederne.


Et  
LIGE  
antal



Et  
ULIGE  
antal




Lige  
mange  
røde  
og  
blå



Regn og sæt kryds.


$$30 - 4 = 26$$

ja nej



$$20 - 4 = 14$$

ja nej




$$15 - 6 = 9$$

ja nej




$$35 - 5 = 30$$

ja nej



$$20 - 4 = 12$$

ja nej



$$50 - 8 = 36$$

ja nej



$$40 - 4 = 36$$

ja nej



Lav regnestykket færdigt.

$21 + \quad = 33$

$17 + \quad = 27$

$6 + \quad = 24$

$32 + \quad = 50$

$9 + \quad = 18$

$25 + \quad = 40$

$3 + \quad = 23$

$30 + \quad = 45$

$8 + \quad = 12$

$20 + \quad = 30$

$18 + \quad = 28$

$13 + \quad = 20$

$12 + \quad = 32$

$7 + \quad = 15$

Regn og træk streg.

$21+3$

$22+4$

$21+10$

$28+4$

$16+20$

$21+9$

$21+8$

$43+7$

$20+2$

$14+20$



$36+9$

$31+8$

$38+6$

$31+11$

$21+6$

$20+15$





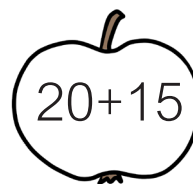


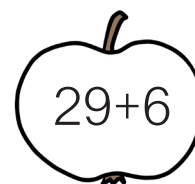






$35+3$

$40+8$

$22+6$

$27+6$

Regn og farv æblerne i de rigtige farver.



20

25

30

35




Regn plus og minus.

**+15**

<b>23</b>	
<b>27</b>	
<b>31</b>	
<b>35</b>	

**-15**

<b>30</b>	
<b>28</b>	
<b>26</b>	
<b>24</b>	




**+20**

<b>15</b>	
<b>18</b>	
<b>21</b>	
<b>24</b>	

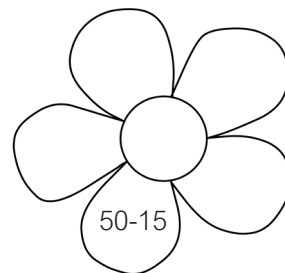








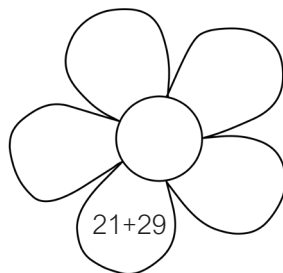


**-20**

<b>50</b>	
<b>47</b>	
<b>44</b>	
<b>41</b>	





Regn og farv blomsterne i de rigtige farver.



35

40

45

50

Regn og træk streg.

$50-3$

$41-10$

$50-5$

$46-5$

$42-4$

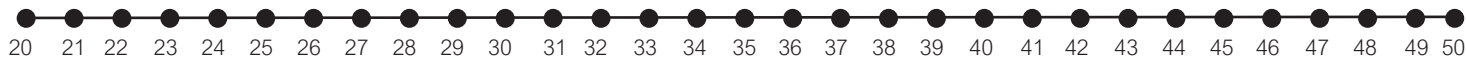
$49-9$

$32-9$

$35-7$

$49-5$

$32-5$



$33-7$

$47-8$

$30-8$

$35-7$

$48-3$

$28-7$

$29-9$

$42-9$

$41-6$

$50-0$

Hvad giver 40? Sæt ring.

25+15      30+5  
10+25      30+10  
20+15  
35+5      **40**      15+10  
30+5      38+2  
20+9      30+5  
19+5      32+8

Hvad giver 20? Sæt ring.

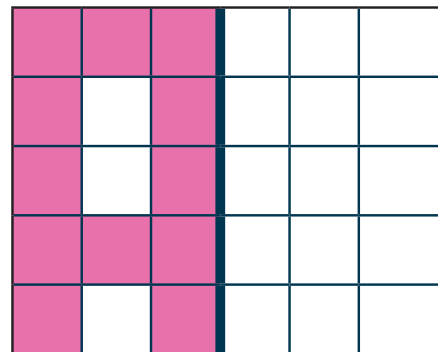

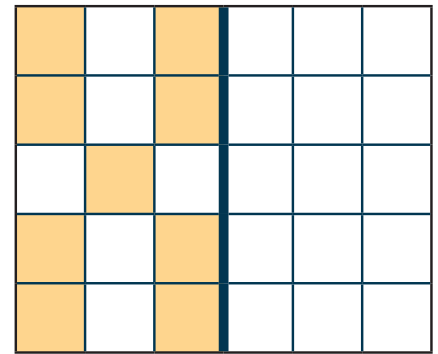

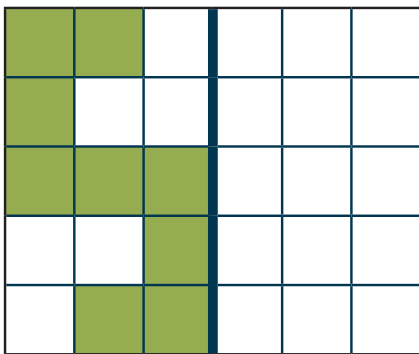
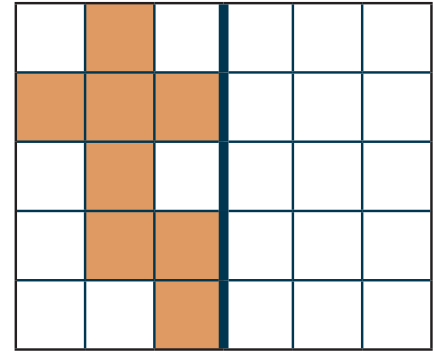

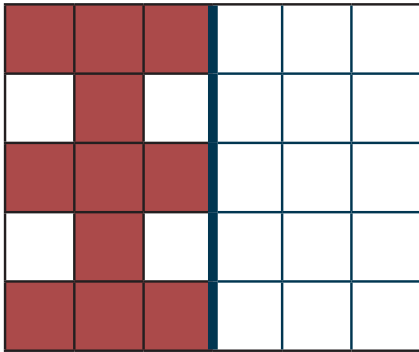
10-0      15-5      29-9  
30-10      26-5  
30-3      **20**      6-6  
27-7      19-8  
18-2  
19-3      25-5

Lav sev regnestykker, der giver 50 og 30.

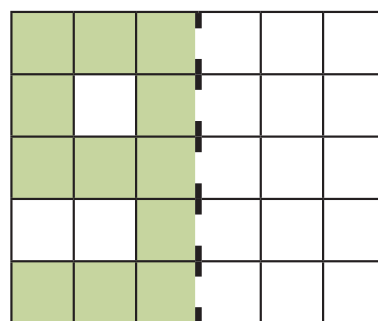

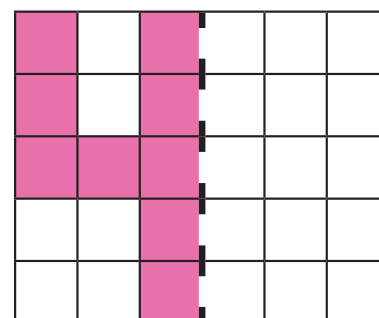
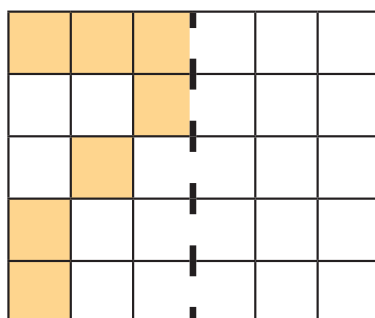
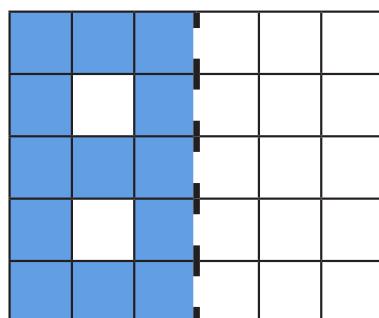
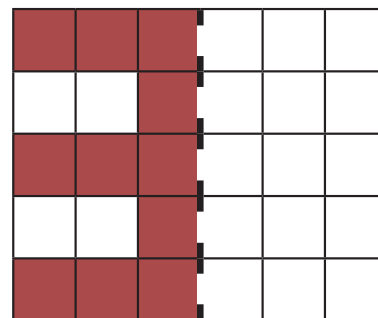
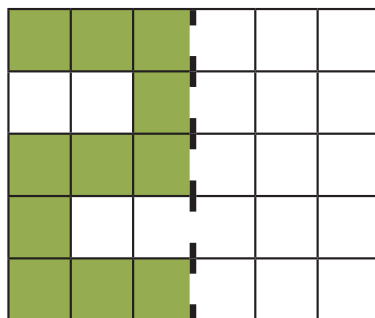
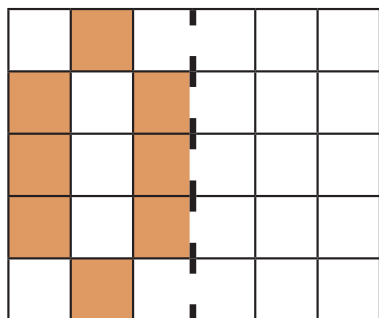
\_\_\_\_\_ + \_\_\_\_\_ = 50  
\_\_\_\_\_ + \_\_\_\_\_ = 50  
\_\_\_\_\_ + \_\_\_\_\_ = 50  
\_\_\_\_\_ + \_\_\_\_\_ = 50

\_\_\_\_\_ - \_\_\_\_\_ = 30  
\_\_\_\_\_ - \_\_\_\_\_ = 30  
\_\_\_\_\_ - \_\_\_\_\_ = 30  
\_\_\_\_\_ - \_\_\_\_\_ = 30


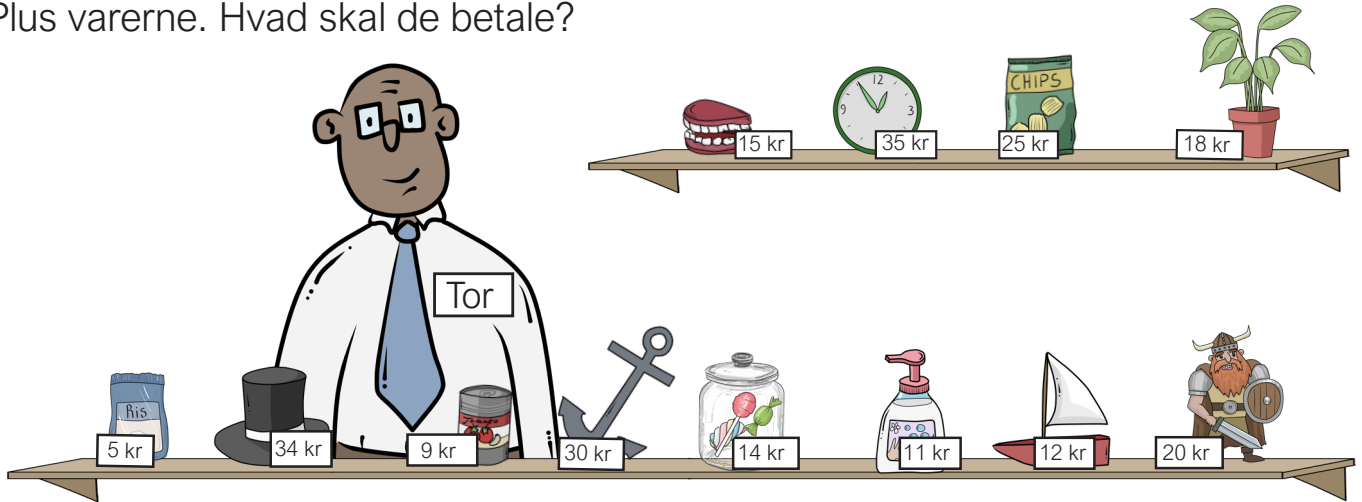
Spejl figureerne.



Spejl figurerne.



Plus varerne. Hvad skal de betale?




\_\_\_\_\_ kr  
 + \_\_\_\_\_ kr  
 = \_\_\_\_\_ kr



\_\_\_\_\_ kr  
 + \_\_\_\_\_ kr  
 = \_\_\_\_\_ kr



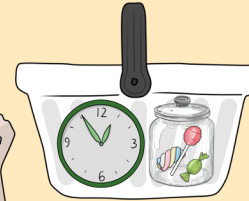
\_\_\_\_\_ kr  
 + \_\_\_\_\_ kr  
 = \_\_\_\_\_ kr



\_\_\_\_\_ kr  
 + \_\_\_\_\_ kr  
 = \_\_\_\_\_ kr

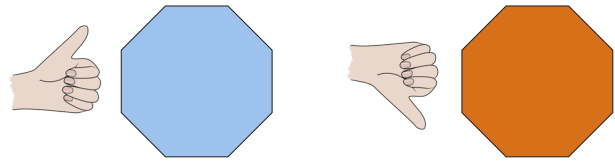


\_\_\_\_\_ kr  
 + \_\_\_\_\_ kr  
 = \_\_\_\_\_ kr



\_\_\_\_\_ kr  
 + \_\_\_\_\_ kr  
 = \_\_\_\_\_ kr

Er regnestykket rigtigt? Regn og farv.



$50-15=30$	$17+17=34$	$39+11=45$	$19-11=8$	$35+14=50$
$15+10=25$	$13+13=35$	$41-13=28$	$49-15=32$	$33-23=10$
$11+24=38$	$17+15=32$	$50-18=30$	$14+15=29$	$18-7=12$
$26+11=37$	$49-11=33$	$24+24=48$	$48-15=36$	$19+15=34$
$50-10=30$	$28+13=41$	$15+17=41$	$39-14=25$	$50-28=26$

Har du penge nok?

A yellow money bag containing one 10 kr coin, one 20 kr coin, and two 5 kr coins. Total: 40 kr.

A trumpet with a price tag of 40 kr.

ja nej

A yellow money bag containing one 20 kr coin and three 5 kr coins. Total: 35 kr.

A lamp with a price tag of 30 kr.

ja nej

A yellow money bag containing three 20 kr coins. Total: 60 kr.

A saw with a price tag of 50 kr.

ja nej

A yellow money bag containing one 10 kr coin, one 20 kr coin, and two 5 kr coins. Total: 40 kr.

A green bucket with a price tag of 10 kr and a green frog with a price tag of 20 kr. Total: 30 kr.

ja nej



A yellow money bag containing one 10 kr coin, one 20 kr coin, and two 5 kr coins. Total: 40 kr.


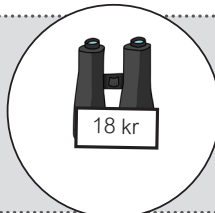
A red sailboat with a price tag of 18 kr and a red book with a price tag of 22 kr. Total: 40 kr.


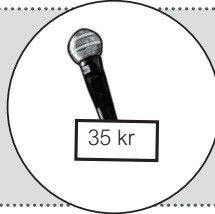
ja nej


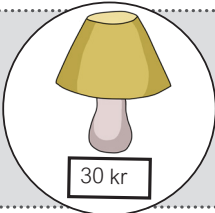




Hvad skal du have tilbage?

   $30 - 25 = \square$

   $\square - \square = \square$

   $\square - \square = \square$

   $\square - \square = \square$

   $\square - \square = \square$

Plus tallene. Både lodret og vandret.

SÅDAN GØR DU

$$\begin{array}{r} 8 \\ + \\ 3 \\ \hline \end{array} = 11$$

$$\begin{array}{r} 8 \\ - \\ 3 \\ \hline \end{array} = 5$$

$$\begin{array}{r} 5 \\ + \\ 9 \\ \hline \end{array} = 14$$

$$\begin{array}{r} 5 \\ - \\ 2 \\ \hline \end{array} = 3$$

$$\begin{array}{r} 13 \\ + \\ 12 \\ \hline \end{array}$$

$$\begin{array}{r} 3 \\ - \\ 1 \\ \hline \end{array}$$

$$\begin{array}{r} \downarrow \quad \downarrow \\ \rightarrow \begin{array}{r} 25 \\ + \\ 5 \\ \hline \end{array} \quad \begin{array}{r} 3 \\ + \\ 11 \\ \hline \end{array} \quad \begin{array}{r} \phantom{0} \\ \phantom{0} \\ \hline \end{array} \\ \rightarrow \phantom{0} \phantom{0} + \end{array}$$

$$\begin{array}{r} \downarrow \quad \downarrow \\ \rightarrow \begin{array}{r} 20 \\ + \\ 19 \\ \hline \end{array} \quad \begin{array}{r} 11 \\ + \\ 20 \\ \hline \end{array} \quad \begin{array}{r} \phantom{0} \\ \phantom{0} \\ \hline \end{array} \\ \rightarrow \phantom{0} \phantom{0} + \end{array}$$

$$\begin{array}{r} \downarrow \quad \downarrow \\ \rightarrow \begin{array}{r} 14 \\ + \\ 10 \\ \hline \end{array} \quad \begin{array}{r} 16 \\ + \\ 22 \\ \hline \end{array} \quad \begin{array}{r} \phantom{0} \\ \phantom{0} \\ \hline \end{array} \\ \rightarrow \phantom{0} \phantom{0} + \end{array}$$

$$\begin{array}{r} \downarrow \quad \downarrow \\ \rightarrow \begin{array}{r} 19 \\ + \\ 20 \\ \hline \end{array} \quad \begin{array}{r} 10 \\ + \\ 24 \\ \hline \end{array} \quad \begin{array}{r} \phantom{0} \\ \phantom{0} \\ \hline \end{array} \\ \rightarrow \phantom{0} \phantom{0} + \end{array}$$

$$\begin{array}{r} \downarrow \quad \downarrow \\ \rightarrow \begin{array}{r} 31 \\ + \\ 10 \\ \hline \end{array} \quad \begin{array}{r} 8 \\ + \\ 40 \\ \hline \end{array} \quad \begin{array}{r} \phantom{0} \\ \phantom{0} \\ \hline \end{array} \\ \rightarrow \phantom{0} \phantom{0} + \end{array}$$

$$\begin{array}{r} \downarrow \quad \downarrow \\ \rightarrow \begin{array}{r} 16 \\ + \\ 15 \\ \hline \end{array} \quad \begin{array}{r} 16 \\ + \\ 21 \\ \hline \end{array} \quad \begin{array}{r} \phantom{0} \\ \phantom{0} \\ \hline \end{array} \\ \rightarrow \phantom{0} \phantom{0} + \end{array}$$

# Minus tallene. Både lodret og vandret.

$$\begin{array}{r}
 \downarrow \quad \downarrow \\
 \rightarrow \quad 50 \quad 30 \quad \square \\
 \rightarrow \quad 20 \quad 10 \quad \square \\
 \square \quad \square \quad -
 \end{array}$$

$$\begin{array}{r}
 \downarrow \quad \downarrow \\
 \rightarrow \quad 24 \quad 14 \quad \square \\
 \rightarrow \quad 12 \quad 10 \quad \square \\
 \square \quad \square \quad -
 \end{array}$$

$$\begin{array}{r}
 \downarrow \quad \downarrow \\
 \rightarrow \quad 32 \quad 12 \quad \square \\
 \rightarrow \quad 22 \quad 12 \quad \square \\
 \square \quad \square \quad -
 \end{array}$$

$$\begin{array}{r}
 \downarrow \quad \downarrow \\
 \rightarrow \quad 28 \quad 24 \quad \square \\
 \rightarrow \quad 22 \quad 12 \quad \square \\
 \square \quad \square \quad -
 \end{array}$$

$$\begin{array}{r}
 \downarrow \quad \downarrow \\
 \rightarrow \quad 45 \quad 15 \quad \square \\
 \rightarrow \quad 30 \quad 10 \quad \square \\
 \square \quad \square \quad -
 \end{array}$$

$$\begin{array}{r}
 \downarrow \quad \downarrow \\
 \rightarrow \quad 50 \quad 25 \quad \square \\
 \rightarrow \quad 20 \quad 14 \quad \square \\
 \square \quad \square \quad -
 \end{array}$$

$$\begin{array}{r}
 \downarrow \quad \downarrow \\
 \rightarrow \quad 24 \quad 14 \quad \square \\
 \rightarrow \quad 21 \quad 11 \quad \square \\
 \square \quad \square \quad -
 \end{array}$$

$$\begin{array}{r}
 \downarrow \quad \downarrow \\
 \rightarrow \quad 49 \quad 19 \quad \square \\
 \rightarrow \quad 14 \quad 7 \quad \square \\
 \square \quad \square \quad -
 \end{array}$$

$$\begin{array}{r}
 \downarrow \quad \downarrow \\
 \rightarrow \quad 23 \quad 11 \quad \square \\
 \rightarrow \quad 13 \quad 9 \quad \square \\
 \square \quad \square \quad -
 \end{array}$$

Lav regnestykket færdigt.

$$25 - \quad = 18$$

$$30 - \quad = 15$$

$$50 - \quad = 35$$

$$45 - \quad = 20$$

$$28 - \quad = 18$$

$$48 - \quad = 30$$

$$34 - \quad = 20$$

$$19 - \quad = 9$$

$$18 - \quad = 9$$

$$26 - \quad = 12$$

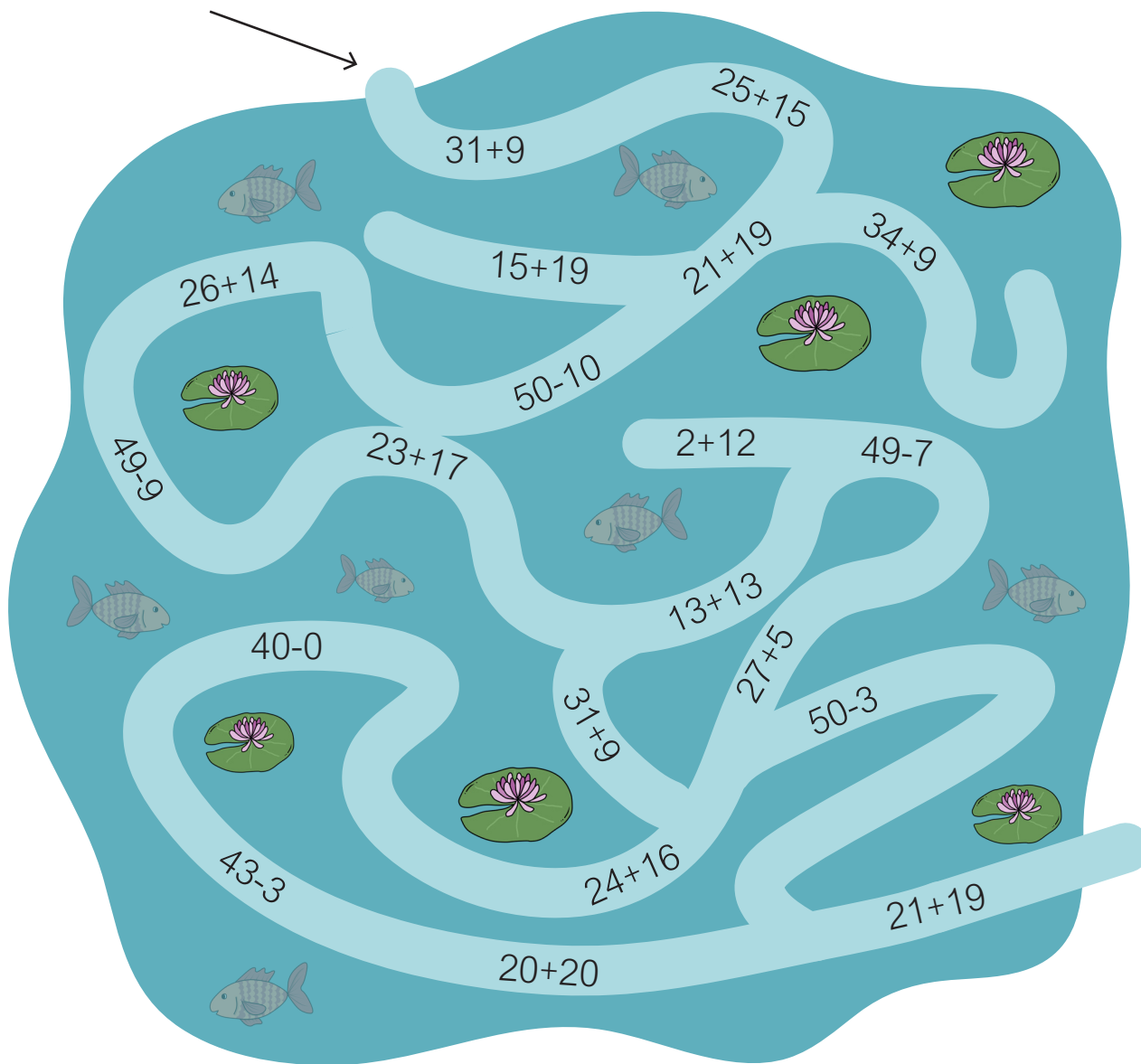
$$49 - \quad = 40$$

$$50 - \quad = 42$$

$$21 - \quad = 10$$



$$17 - \quad = 8$$

Gå kun på regnestykker, der giver 40.

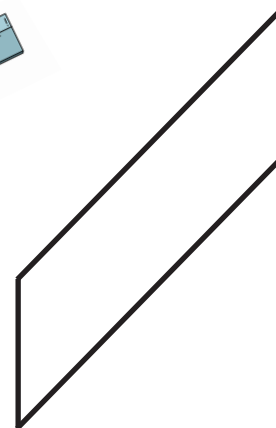


Hvor mange regnestykker giver IKKE 40? \_\_\_\_\_


Mål og skriv. Hvor lange er figurernes linjer i alt?



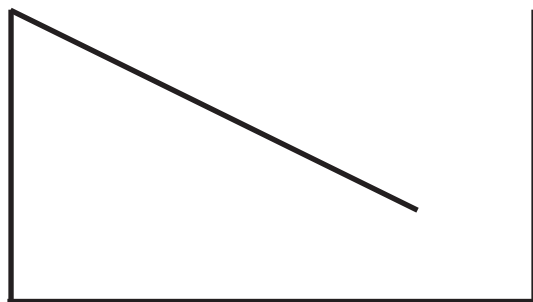
$$4 + 3 + 4 = 11 \text{ cm}$$



$$+ + + = \text{ cm}$$



$$+ + + = \text{ cm}$$


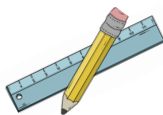
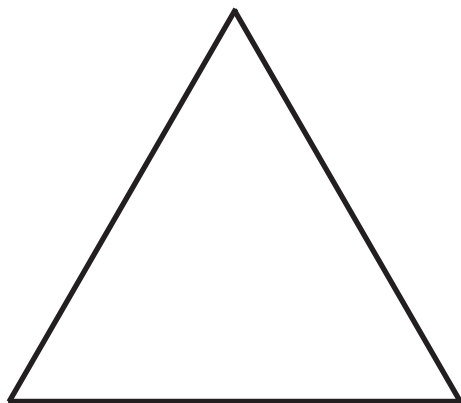


$$+ + = \text{ cm}$$




$$+ + + = \text{ cm}$$

Mål og skriv. Hvor lange er figurernes linjer i alt?

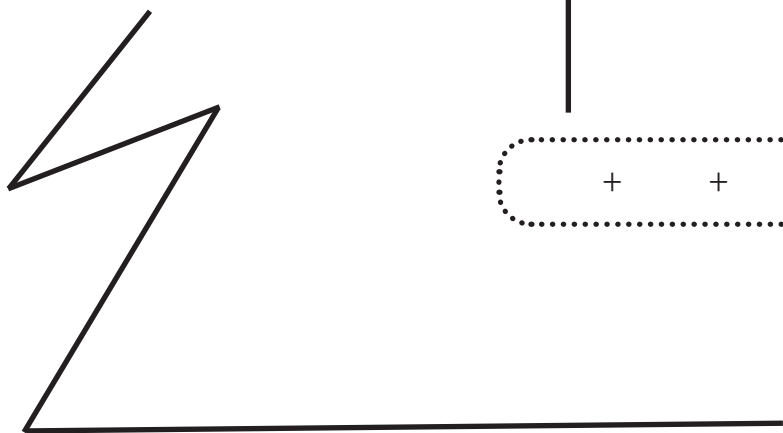


$$+ + = \text{cm}$$

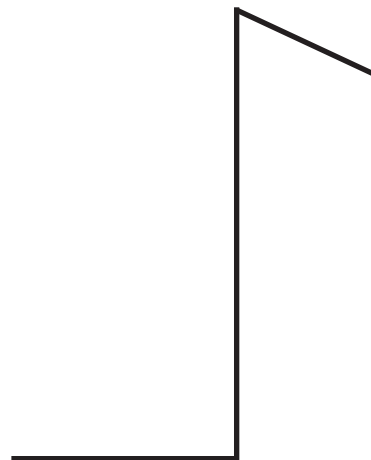
$$6 + 6 + 6 = 18 \text{ cm}$$



$$+ + = \text{cm}$$

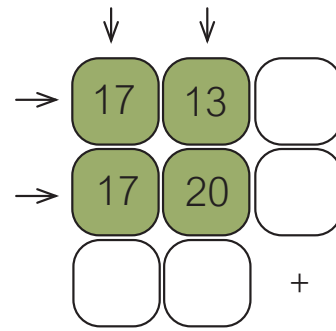
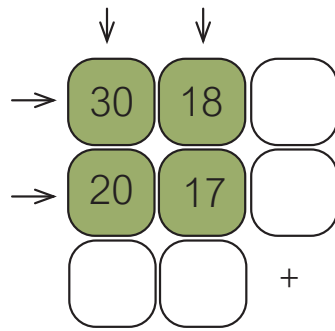
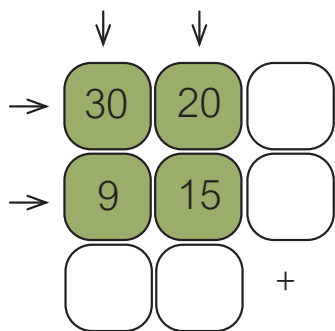
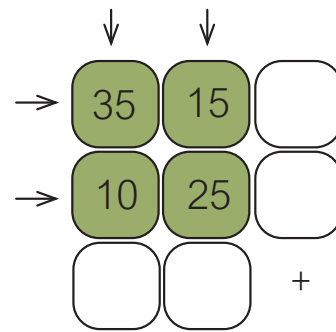
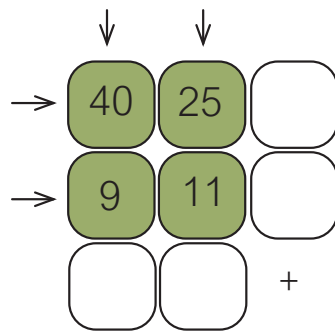
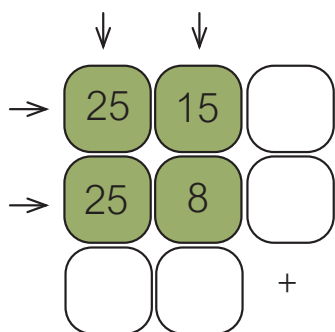
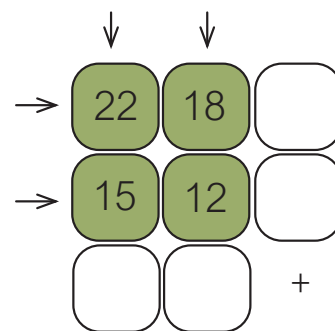
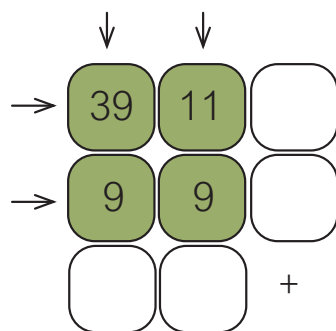
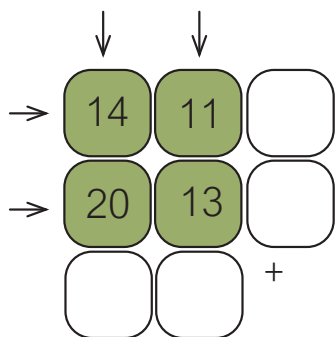


$$+ + + = \text{cm}$$



$$+ + = \text{cm}$$

Plus tallene. Både lodret og vandret.





# Minus tallene. Både lodret og vandret.

$$\begin{array}{r} \downarrow \quad \downarrow \\ \rightarrow 25 \quad 15 \quad \square \\ \rightarrow 12 \quad 11 \quad \square \\ \square \quad \square \quad - \end{array}$$

$$\begin{array}{r} \downarrow \quad \downarrow \\ \rightarrow 50 \quad 15 \quad \square \\ \rightarrow 30 \quad 10 \quad \square \\ \square \quad \square \quad - \end{array}$$

$$\begin{array}{r} \downarrow \quad \downarrow \\ \rightarrow 48 \quad 13 \quad \square \\ \rightarrow 17 \quad 9 \quad \square \\ \square \quad \square \quad - \end{array}$$

$$\begin{array}{r} \downarrow \quad \downarrow \\ \rightarrow 40 \quad 25 \quad \square \\ \rightarrow 20 \quad 10 \quad \square \\ \square \quad \square \quad - \end{array}$$

$$\begin{array}{r} \downarrow \quad \downarrow \\ \rightarrow 31 \quad 11 \quad \square \\ \rightarrow 20 \quad 8 \quad \square \\ \square \quad \square \quad - \end{array}$$

$$\begin{array}{r} \downarrow \quad \downarrow \\ \rightarrow 28 \quad 14 \quad \square \\ \rightarrow 18 \quad 7 \quad \square \\ \square \quad \square \quad - \end{array}$$

$$\begin{array}{r} \downarrow \quad \downarrow \\ \rightarrow 50 \quad 30 \quad \square \\ \rightarrow 25 \quad 20 \quad \square \\ \square \quad \square \quad - \end{array}$$

$$\begin{array}{r} \downarrow \quad \downarrow \\ \rightarrow 45 \quad 20 \quad \square \\ \rightarrow 25 \quad 15 \quad \square \\ \square \quad \square \quad - \end{array}$$

$$\begin{array}{r} \downarrow \quad \downarrow \\ \rightarrow 35 \quad 15 \quad \square \\ \rightarrow 15 \quad 9 \quad \square \\ \square \quad \square \quad - \end{array}$$

Lav regnestykket færdigt.

$16 + \quad = 26$

$31 + \quad = 45$

$23 + \quad = 35$

$40 + \quad = 50$

$25 + \quad = 40$

$15 + \quad = 30$

$35 + \quad = 48$

$17 + \quad = 27$

$18 + \quad = 30$

$22 + \quad = 26$

$34 + \quad = 40$

$19 + \quad = 39$

$18 + \quad = 29$

$26 + \quad = 34$

Regn og sæt ring om det billede i sløjfen, der giver det rigtige resultat.

$20+15$

$35-6$

$11+12$

$50-20$

$33+9$


$42-11$

Regn på kryds og tværs.

A grid of math problems is presented on a background of green leaves and ants. The grid consists of several rows and columns of boxes containing numbers, symbols, and equals signs. The problems are as follows:

15	+	8	=	23					
				-					
			+	10	=	27			
			=			-			
19	-	6	=					16	
+						=		+	
		14			+	13	=	20	
=			-					=	
30	-		=	20					
			=						
15	-		=						

Fortsæt mønstrene.



Tegn et fantasidyr.

Det skal have:

10 øjne

10 ben

10 hår

10 tænder

10 tunger

10 arme


10 hænder

10 horn

10 striber

10 prikker

Hvor mange ting har  
du nu tegnet på  
dit fantasidyr?



Hvad hedder dyret?



## Prøv også:

